

Find the total



Complete the table.

Pounds	Pence	Total
£1	5p	£_____ and _____p
£2	25p	£_____ and _____p
£2	70p	£_____ and _____p
£3	95p	£_____ and _____p
£_____	15p	£4 and _____p
£_____	_____p	£8 and 10p
£_____	_____p	£12 and 50p
£_____	_____p	£15 and 25p
£_____	_____p	£18 and 75p
£5	_____p	£_____ and 45p
£_____	30p	£6 and _____p
£7	_____p	£_____ and 60p

Find the total



- 1 Tam buys an apple, a banana and an orange.



20p



30p



20p

How much does she spend? £_____ and _____p.

- 2 Gina buys some juice, milk and a loaf of bread.



£1



50p



40p

How much does she spend? £_____ and _____p.

- 3 Mo buys a pair of socks, a hat and a pair of gloves.



50p



£2



£1 and 10p

How much does he spend? £_____ and _____p.

- 4 Ben buys a tape dispenser, a calculator and a pair of scissors.



£1 and 50p



£2



50p

How much does he spend? £_____ and _____p.

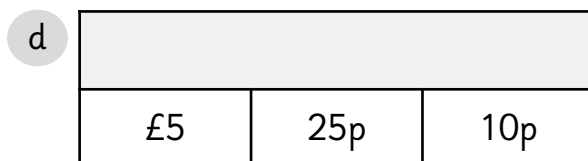

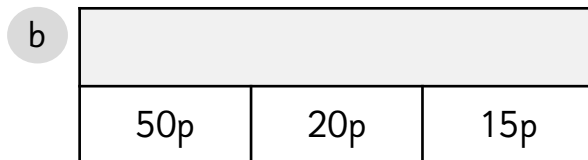

Find the total



1 Complete the table.

Pounds	Pence	Total
£1	25p	£_____ and _____p
£2	_____p	£_____ and 60p
£_____	_____p	£3 and 90p
£4	22p	£_____ and _____p
£8	56p	£_____ and _____p
£_____	29p	£10 and _____p
£_____	_____p	£12 and 30p
£15	_____p	£_____ and 90p

2 Complete the bar models.



Find the total



1 Ben buys a pair of socks, a hat, a pair of gloves and a hoodie.



£1 and 25p



£2 and 25p



£1 and 75p



£4 and 75p

- a) What is the total of the hat and the socks? £_____ and _____p.
- b) What is the total of the hoodie and the gloves? £_____ and _____p.
- c) The total of all the items is £11. Is this true or false? Explain how you know.

2 Look at the coins and notes.



Using the coins and notes more than once, how many different ways can you show an amount that is **greater** than £10 but **less** than £20?

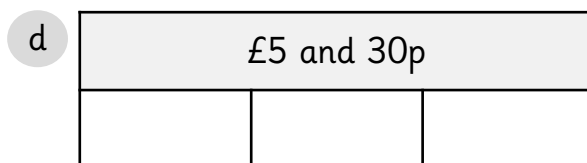
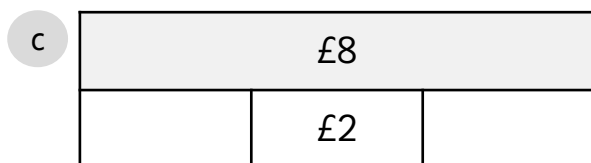


Find the total



1 Complete the table.

Pounds	Pence	Total
£4	25p	£_____ and _____p
£7	_____p	£_____ and 40p
£_____	_____p	£10 and 55p
£13	_____p	£_____ and 95p
£_____	15p	£14 and _____p
£20	_____p	£_____ and 99p

2 Complete the bar models.



3 Rob buys a tape dispenser, calculator, a pair of scissors and a pack of pencils.




£3 and 30p



£4



£1 and 20p



£1 and 50p

How much does he spend? £_____ and _____p.

Find the total



1 Here is a shopping list.

Item	Price
Jam	£1 and 5p
Bread	40p
Milk	80p
Juice	£1
A carton of eggs	£1 and 50p
Honey	£1 and 25p

a) I spend exactly £2.25. Which items did I buy? _____

b) Which two items cost £1 and 20p? _____

c) I bought two of the same item. The total cost was £2 and 10p.

What was the item? _____

d) What is the total cost of the **cheapest** item and the most **expensive** item on the list? _____

2 Look at the coins and notes.



Using the coins and notes more than once, how many different ways can you show an amount that is **greater** than £20 but **less** than £30?