

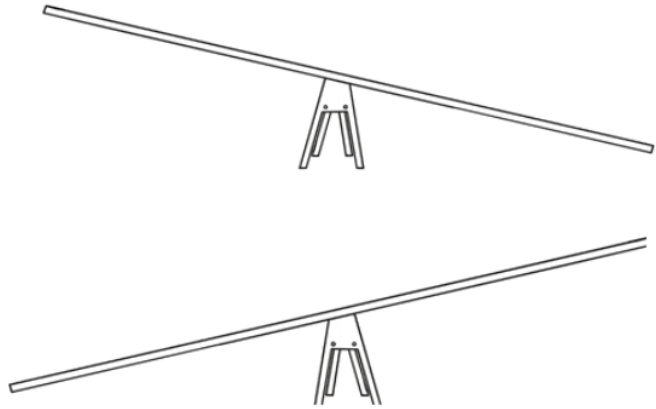
Lesson 1

Independent Task

Task

Here are our scales again. Can you find something that is heavy and something that is light?

Where would they go on the scales?



Can you complete these sentences?

The _____ is heavier than the _____.

The _____ is lighter than the _____.

Challenge

Can you find two different objects in your house that you think would weigh the same?



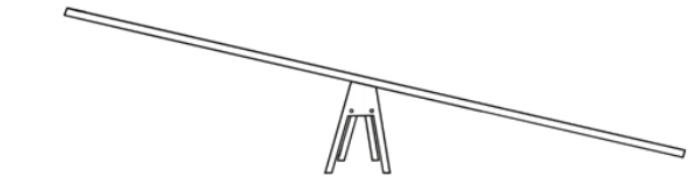


Lesson 2

Independent Task

Task

Here are our scales again. Use some objects in your house to group together in various combinations to explore which ones have the heaviest mass or the lightest mass.



Can you complete these sentences?

The _____ and _____ are heavier than the _____ and _____.

The _____ and _____ are lighter than the _____ and _____.

Can you find a combination of different objects in your house that you think would weigh the same?

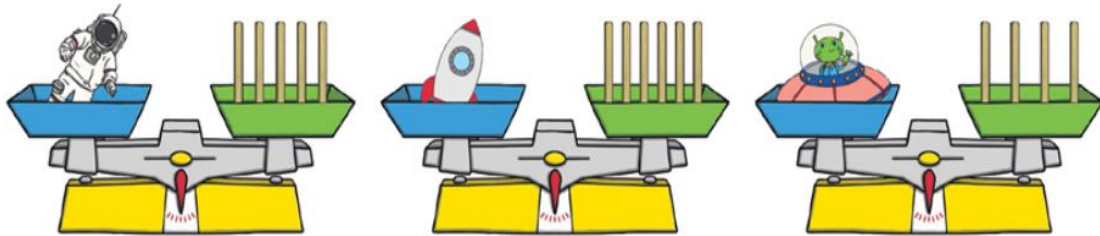


Lesson 3

Independent Task

Task 1

Match the scales to the correct statement.



It weighs more than 5 sticks.

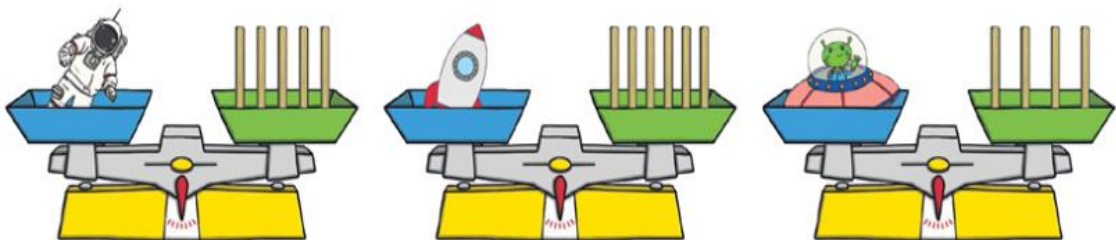
It weighs less than 5 sticks.

It weighs the same as 5 sticks.

Independent Task

Task 2

Use the words **more** or **less** to complete these sentences.



The rocket weighs _____ than the spaceman.

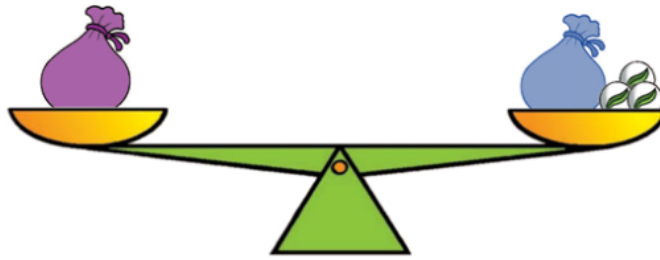
The alien weighs _____ than the rocket.

The spaceman weighs _____ than the alien.

Lesson 4

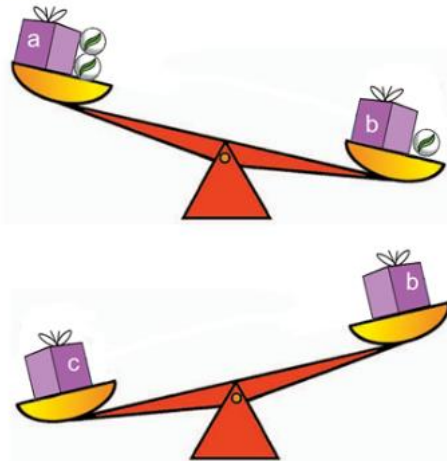
Independent Task

Task 1



Which bag is heavier?

Task 2



Which box do you think is the heaviest, a, b, c, or d?

Explain why.

Lesson 5

Independent Task

Task

Object	Less than 1kg	Equal to 1kg	More than 1kg
A - book	<input checked="" type="checkbox"/>		
B			
C			
D			