

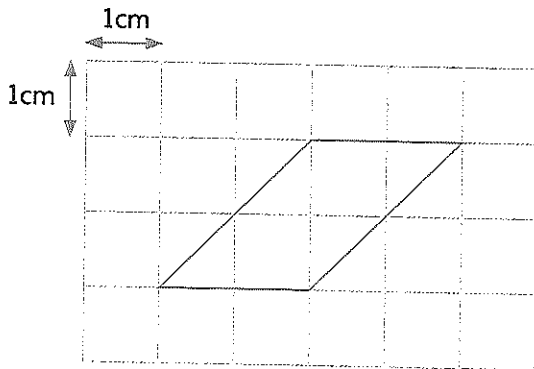
Test 18: Measurement

1 Circle the measurement that is not equivalent to the other three.

0.4km 40cm 0.4m 400mm

1 mark

2 Look at this parallelogram.



What is the area of the parallelogram?

1 mark

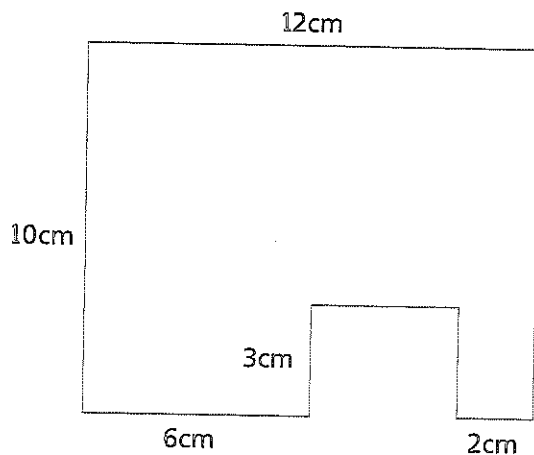
3 Five friends share their food bill equally.

They each pay £11.20.

How much did the food cost altogether?

1 mark

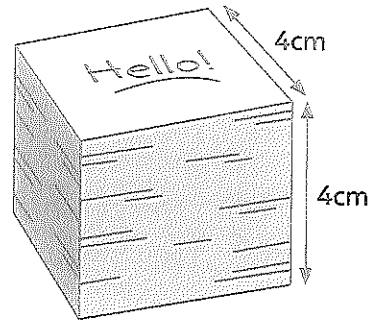
4 Find the perimeter of this shape.


1 mark

- 5 Pads of sticky notes are the shape of a cube with sides of 4cm.

The pads are placed in a box that is the shape of a cuboid and measures 8cm by 8cm by 12cm.

How many pads will fit into the box?



Show your method.

pads

3 marks

- 6 Mr Singh mixes 0.4kg of flour, 505g of butter and some sugar.

The whole mixture weighs 2kg.

How many kilograms of sugar does he use?

Show your method.

kg

2 marks

- 7 Tick the two statements that are correct.

1cm = 10mm

1cm = 100mm

100mm = 10cm

1 mark

Total marks Time taken