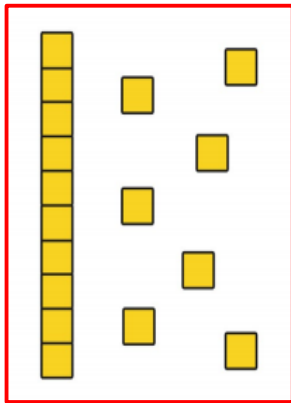

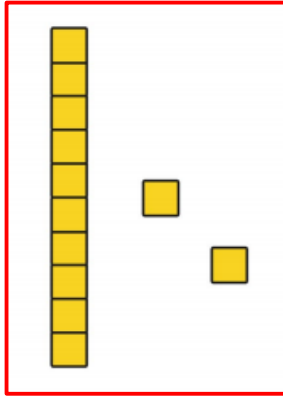


Dienes Representations to 20

Write the number that is being represented by the dienes.



Draw the dienes to represent each number. Remember your chips and peas!

13

A large empty rectangular box for drawing dienes to represent the number 13.

8

A large empty rectangular box for drawing dienes to represent the number 8.

20

A large empty rectangular box for drawing dienes to represent the number 20.

Challenge → 24

A large empty rectangular box with a green border for drawing dienes to represent the number 24.