






## Finish the pictures

	<input type="text" value="4"/> pots
	<input type="text" value="2"/> seeds in each pot
	<input type="text"/> seeds in total

	<input type="text" value="3"/> pots
	<input type="text"/> seeds in each pot
	<input type="text" value="9"/> seeds in total

	<input type="text"/> pots
	<input type="text" value="2"/> seeds in each pot
	<input type="text" value="6"/> seeds in total

	<input type="text"/> pots
	<input type="text"/> seeds in each pot
	<input type="text" value="10"/> seeds in total



## Finish the pictures

	<input type="text" value="4"/> tents
	<input type="text" value="5"/> in each tent
	<input type="text"/> people in total

	<input type="text" value="3"/> tents
	<input type="text"/> in each tent
	<input type="text" value="12"/> people in total

	<input type="text"/> tents
	<input type="text" value="2"/> in each tent
	<input type="text" value="14"/> people in total

	<input type="text"/> tents
	<input type="text"/> in each tent
	<input type="text" value="15"/> people in total



### Fill the gaps

6	people
	eyes
	toes

	people
6	eyes
	toes

	people
	eyes
20	toes

Draw blue line: \_\_\_\_\_

Draw a line **3 times longer** than the blue line:

Draw a line **half as long** as the blue line:

### Fill the gaps



The  line is **half** as long as the **red** line.

The green line is **4 times** longer than the  line.