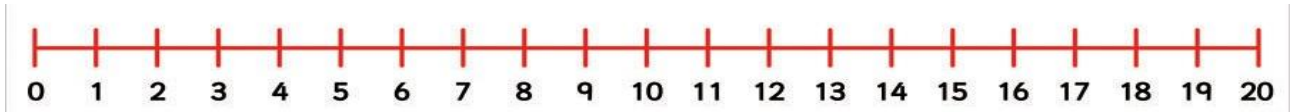


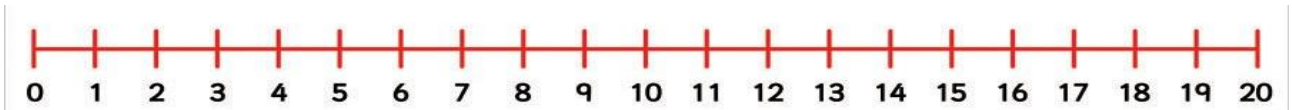


Complete the division calculations using a number line.

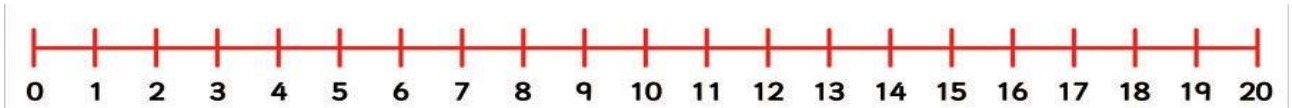
1. $20 \div 10 =$



2. $15 \div 5 =$



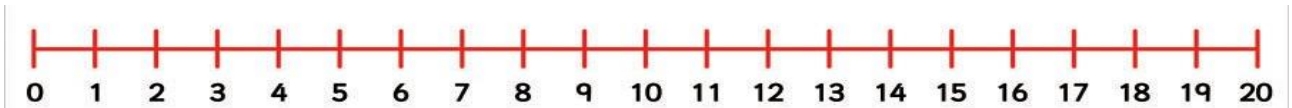
3. $4 \div 2 =$



4. $30 \div 10 =$



5. $10 \div 2 =$



6. $25 \div 5 =$





Complete the division calculations using a number line.

1. $16 \div 4 =$



2. $24 \div 6 =$



3. $21 \div 3 =$



4. $22 \div 2 =$



5. $20 \div 4 =$





Complete these division calculations by drawing your own number lines.

1. $35 \div 5 =$

2. $32 \div 4 =$

3. $42 \div 7 =$

4. $36 \div 4 =$

5. $40 \div 8 =$

6. $24 \div 6 =$