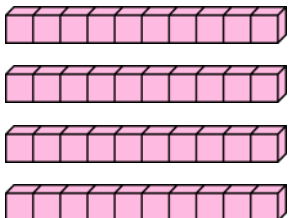
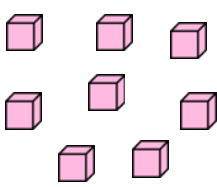
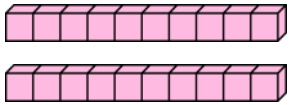
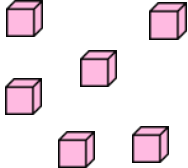
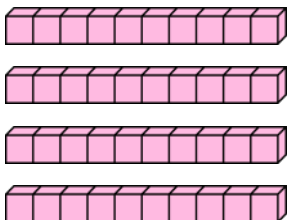
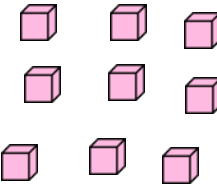
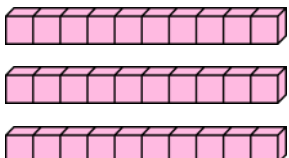
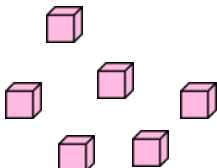
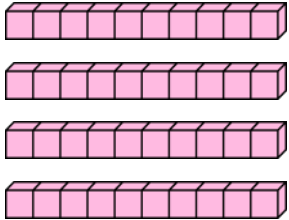
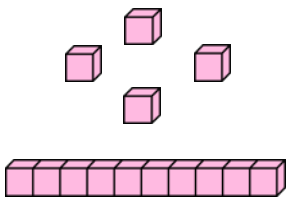
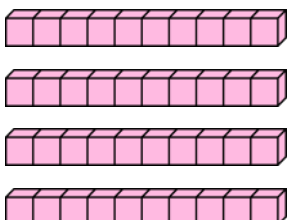
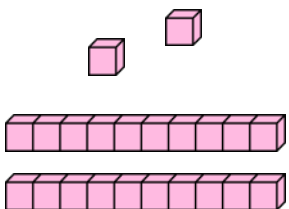


Subtract with 2-digits (1)



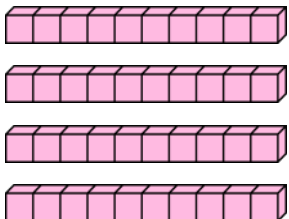
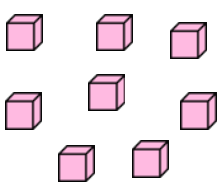
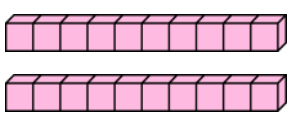
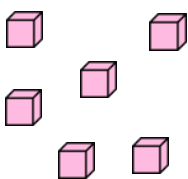
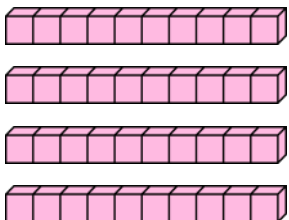
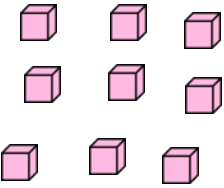
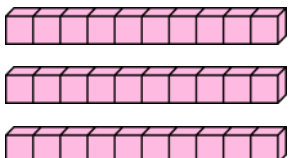
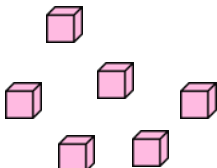
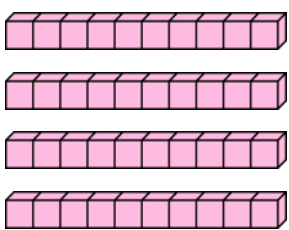
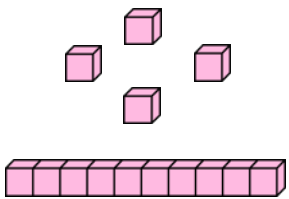
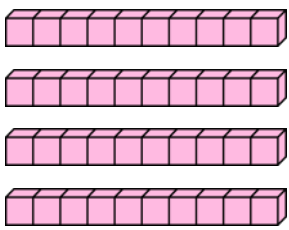
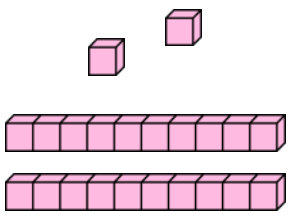
1 Cross off Base 10 to help you complete the subtraction problems.

<p>48 - 23</p>  	$\begin{array}{r} \boxed{4} \boxed{8} \\ - \boxed{2} \boxed{3} \\ \hline \boxed{} \boxed{} \end{array}$
<p>26 - 14</p>  	$\begin{array}{r} \boxed{2} \boxed{6} \\ - \boxed{1} \boxed{4} \\ \hline \boxed{} \boxed{} \end{array}$
<p>49 - 35</p>  	$\begin{array}{r} \boxed{4} \boxed{9} \\ - \boxed{3} \boxed{5} \\ \hline \boxed{} \boxed{} \end{array}$
<p>36 - 13</p>  	$\begin{array}{r} \boxed{3} \boxed{6} \\ - \boxed{1} \boxed{3} \\ \hline \boxed{} \boxed{} \end{array}$
<p>54 - 22</p>  	$\begin{array}{r} \boxed{5} \boxed{4} \\ - \boxed{2} \boxed{2} \\ \hline \boxed{} \boxed{} \end{array}$
<p>62 - 41</p>  	$\begin{array}{r} \boxed{6} \boxed{2} \\ - \boxed{4} \boxed{1} \\ \hline \boxed{} \boxed{} \end{array}$

Subtract with 2-digits (1)



1 Cross off Base 10 to help you complete the subtraction problems.

<p>48 - 23</p>  	$\begin{array}{r} \square \square \\ - \square \square \\ \hline \square \square \end{array}$
<p>26 - 14</p>  	$\begin{array}{r} \square \square \\ - \square \square \\ \hline \square \square \end{array}$
<p>49 - 35</p>  	$\begin{array}{r} \square \square \\ - \square \square \\ \hline \square \square \end{array}$
<p>36 - 13</p>  	$\begin{array}{r} \square \square \\ - \square \square \\ \hline \square \square \end{array}$
<p>54 - 22</p>  	$\begin{array}{r} \square \square \\ - \square \square \\ \hline \square \square \end{array}$
<p>62 - 41</p>  	$\begin{array}{r} \square \square \\ - \square \square \\ \hline \square \square \end{array}$