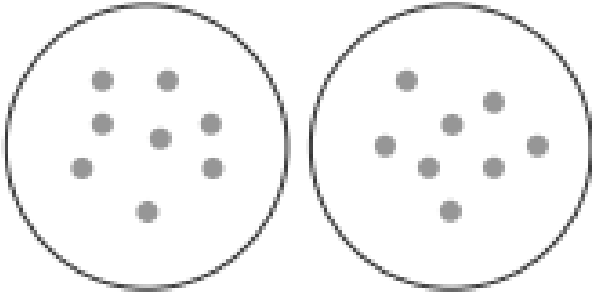




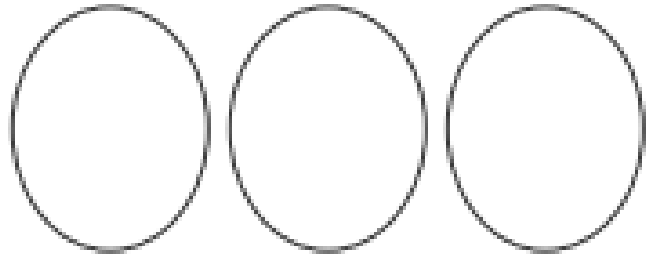
Complete the division word problems by sharing into equal groups.

Jordan has a bag of 16 sweets. If he shares them equally with his brother, how many sweets will they get each?



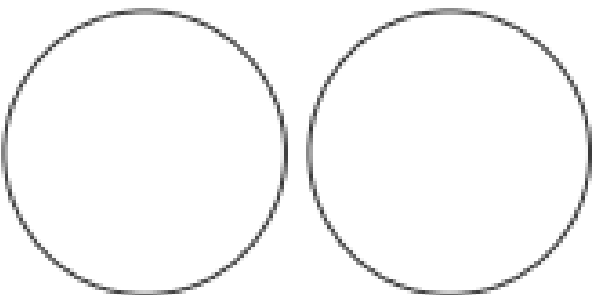
$$16 \div 2 = 8$$

Three friends found some conkers and shared them out. If there were 18 conkers altogether, how many did they get each?



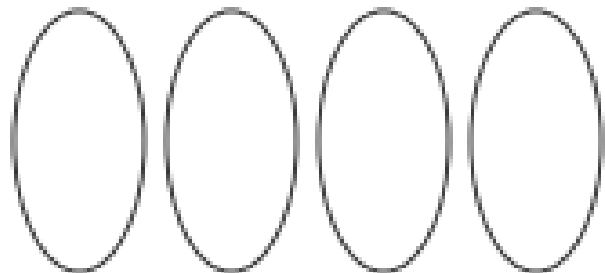
$$18 \div 3 =$$

A chef shares 14 pieces of pepperoni onto two pizzas. How many did he put on each one?




$$14 \div 2 =$$

There are 20 children in class 2G. Their teacher sorted them into four equal groups. How many children were there in each group?

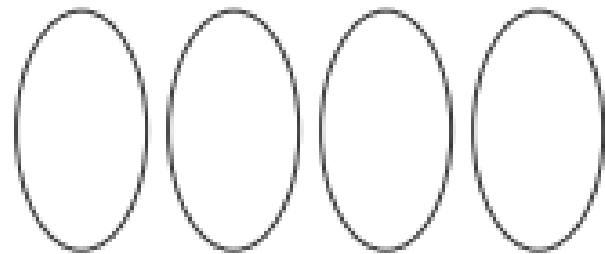


$$20 \div 4 =$$

Marge gives her three grandchildren £21 to share between them. How much money do they get each?



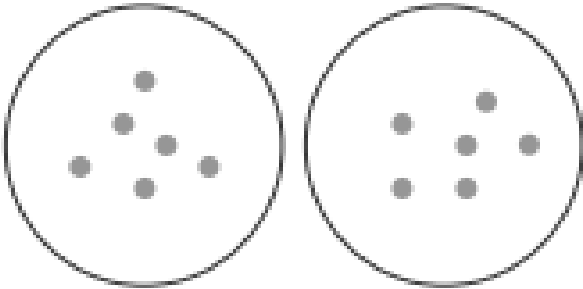
Mrs. Jones plants 24 flowers equally in four rows. How many flowers does she plant in each row?





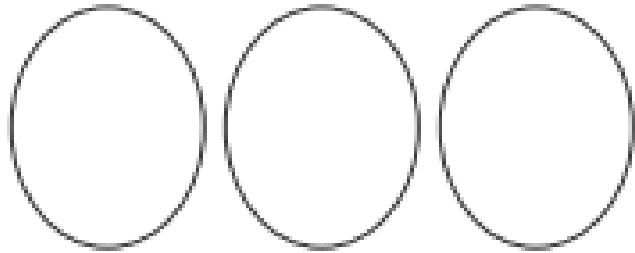
Complete the division word problems by sharing into equal groups.

At the supermarket, dad shares 12 tins equally into two bags. How many tins does he put in each bag?



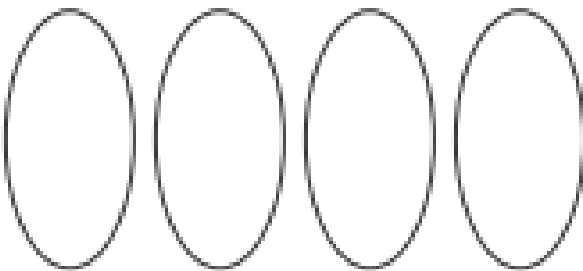
$$12 \div 2 = 6$$

Matthew, Emily and Harry share out 15 marbles. How many marbles do they get each?



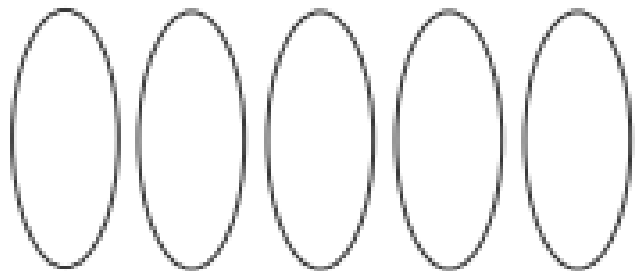
$$15 \div 3 =$$

Mandy has 28cm of sticky tape to wrap four small parcels. How much tape should she use on each one?



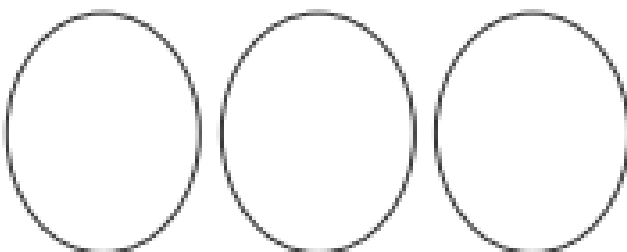
$$28 \div 4 =$$

15 scouts need to share five tents at their summer camp. How many scouts should stay in each tent?

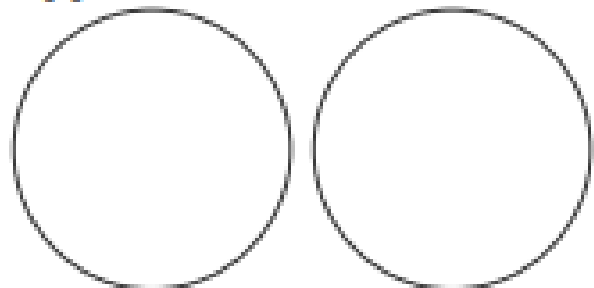


$$15 \div 5 =$$

George spent 12 days in Italy visiting three cities. How many days did he stay in each one if he shared his time equally?



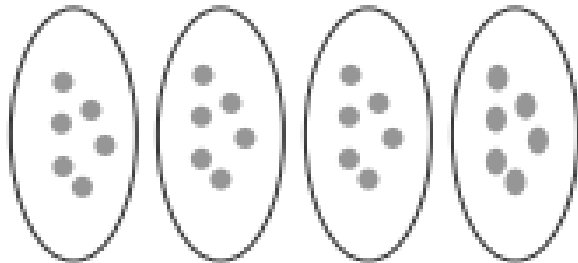
Class 2G has an equal number of boys and girls. If there are 18 children altogether, how many girls are there?





Complete the division word problems by sharing into equal groups.

Cassie and her three friends are playing a card game. They share out 24 cards. How many cards do they get each?



$$24 \div 4 = 6$$

Three friends found some conkers and shared them out. If there were 18 conkers altogether, how many did they get each?

A chef shares 14 pieces of pepperoni onto two pizzas. How many did he put on each one?

There are 20 children in class 2G. Their teacher sorted them into four equal groups. How many children were there in each group?

Marge gives her three grandchildren £21 to share between them. How much money do they get each?

Mrs. Jones plants 24 flowers equally in four rows. How many flowers does she plant in each row?