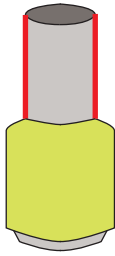


**Parallel vs Perpendicular Lines**

Sheet 1

Identify the highlighted pair of lines as parallel or perpendicular in each object.

1)



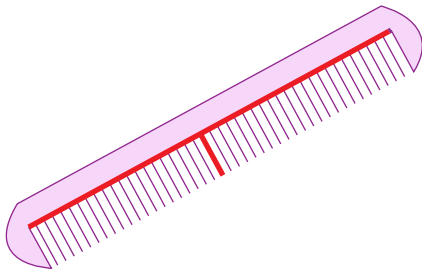
\_\_\_\_\_

2)



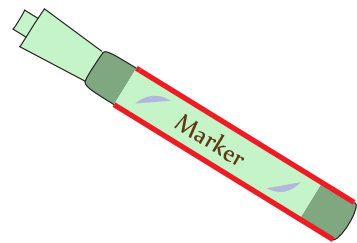
\_\_\_\_\_

3)



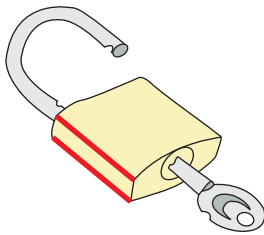
\_\_\_\_\_

4)



\_\_\_\_\_

5)



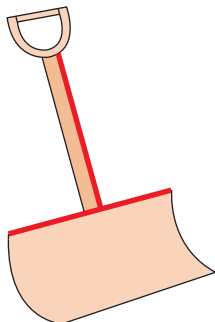
\_\_\_\_\_

6)



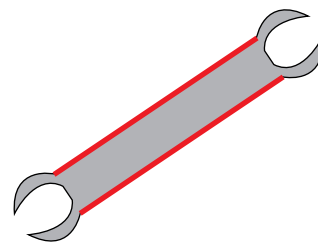
\_\_\_\_\_

7)



\_\_\_\_\_

8)



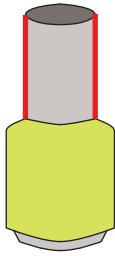
\_\_\_\_\_

**Parallel vs Perpendicular Lines**

Sheet 1

Identify the highlighted pair of lines as parallel or perpendicular in each object.

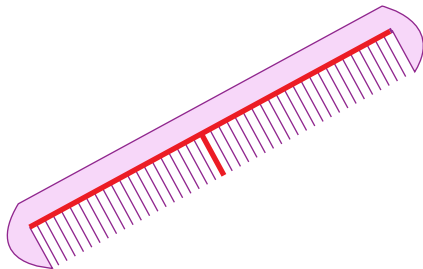
1)

**parallel**

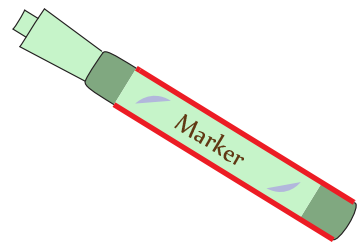
2)

**perpendicular**

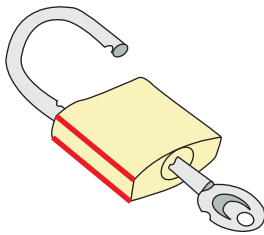
3)

**perpendicular**

4)

**parallel**

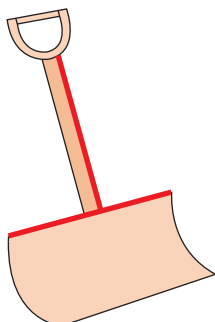
5)

**parallel**

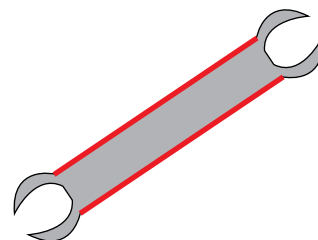
6)

**perpendicular**

7)

**perpendicular**

8)

**parallel**