

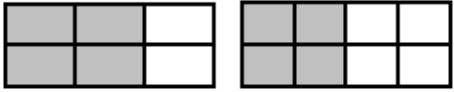
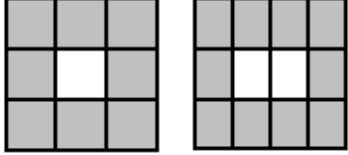
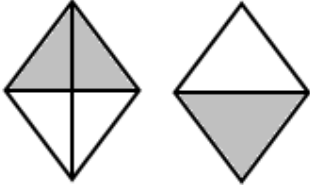
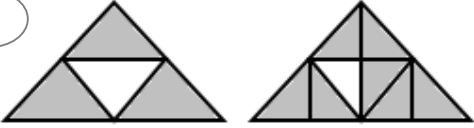

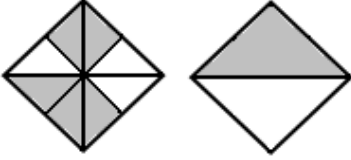
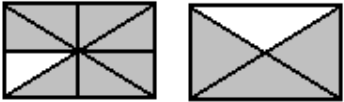
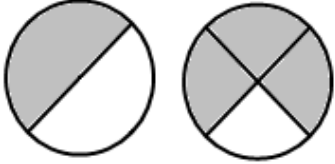
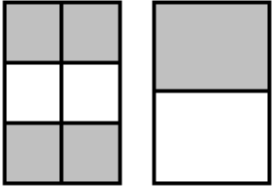
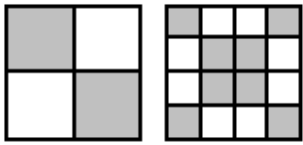
Student Name: _____

Score: _____

Compare the Shapes

Sheet 2

Represent the shaded parts in fraction and write > or < or = for each pair:

<p>1</p>  <p>$\frac{\square}{\square}$ $\frac{\square}{\square}$</p>	<p>2</p>  <p>$\frac{\square}{\square}$ $\frac{\square}{\square}$</p>
<p>3</p>  <p>$\frac{\square}{\square}$ $\frac{\square}{\square}$</p>	<p>4</p>  <p>$\frac{\square}{\square}$ $\frac{\square}{\square}$</p>
<p>5</p>  <p>$\frac{\square}{\square}$ $\frac{\square}{\square}$</p>	<p>6</p>  <p>$\frac{\square}{\square}$ $\frac{\square}{\square}$</p>
<p>7</p>  <p>$\frac{\square}{\square}$ $\frac{\square}{\square}$</p>	<p>8</p>  <p>$\frac{\square}{\square}$ $\frac{\square}{\square}$</p>
<p>9</p>  <p>$\frac{\square}{\square}$ $\frac{\square}{\square}$</p>	<p>10</p>  <p>$\frac{\square}{\square}$ $\frac{\square}{\square}$</p>

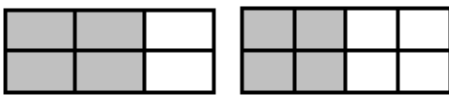
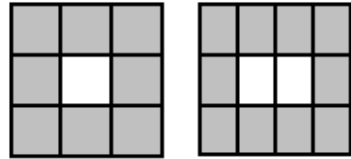
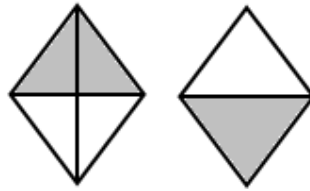
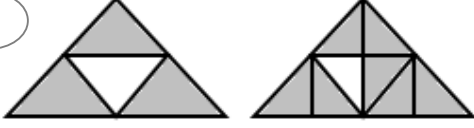

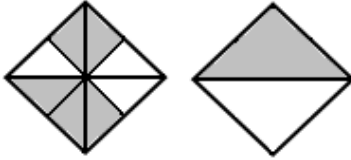

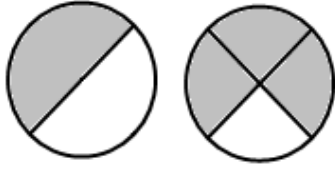
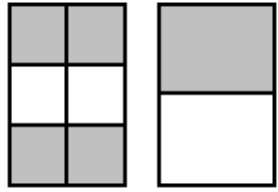
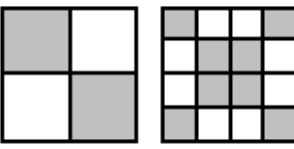
Student Name: _____

Score: _____

Answer key

Compare the Shapes

Sheet 2

<p>1</p>  <p>$\frac{4}{6} > \frac{4}{8}$</p>	<p>2</p>  <p>$\frac{8}{9} > \frac{10}{12}$</p>
<p>3</p>  <p>$\frac{2}{4} = \frac{1}{2}$</p>	<p>4</p>  <p>$\frac{3}{4} < \frac{7}{8}$</p>
<p>5</p>  <p>$\frac{3}{5} > \frac{4}{7}$</p>	<p>6</p>  <p>$\frac{5}{8} > \frac{1}{2}$</p>
<p>7</p>  <p>$\frac{7}{8} > \frac{3}{4}$</p>	<p>8</p>  <p>$\frac{1}{2} < \frac{3}{4}$</p>
<p>9</p>  <p>$\frac{4}{6} > \frac{1}{2}$</p>	<p>10</p>  <p>$\frac{2}{4} = \frac{8}{16}$</p>