

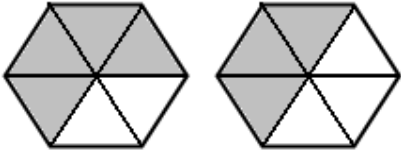
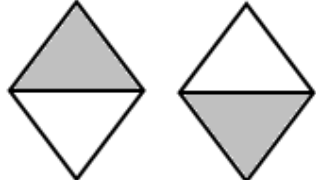
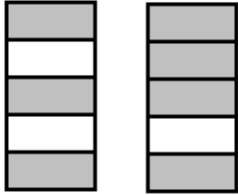
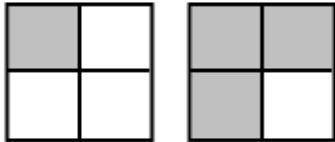
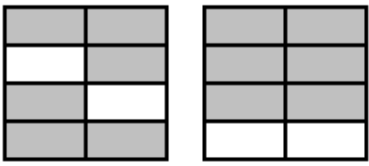
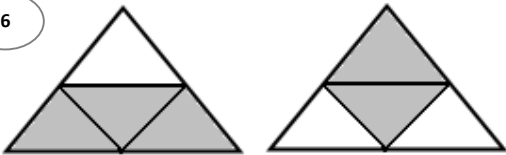
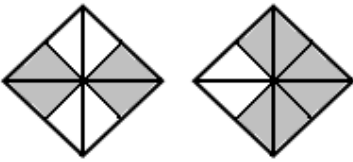

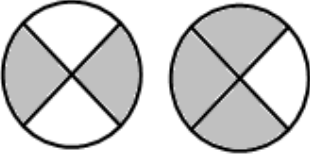
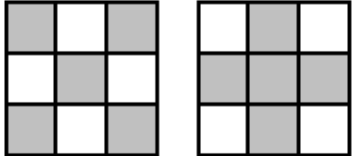
Student Name: _____

Score: _____

Compare the Shapes

Sheet 1

Represent the shaded parts in fraction and write > or < or = for each pair:

<p>1</p>  <p>$\frac{\square}{\square}$ \square $\frac{\square}{\square}$</p>	<p>2</p>  <p>$\frac{\square}{\square}$ \square $\frac{\square}{\square}$</p>
<p>3</p>  <p>$\frac{\square}{\square}$ \square $\frac{\square}{\square}$</p>	<p>4</p>  <p>$\frac{\square}{\square}$ \square $\frac{\square}{\square}$</p>
<p>5</p>  <p>$\frac{\square}{\square}$ \square $\frac{\square}{\square}$</p>	<p>6</p>  <p>$\frac{\square}{\square}$ \square $\frac{\square}{\square}$</p>
<p>7</p>  <p>$\frac{\square}{\square}$ \square $\frac{\square}{\square}$</p>	<p>8</p>  <p>$\frac{\square}{\square}$ \square $\frac{\square}{\square}$</p>
<p>9</p>  <p>$\frac{\square}{\square}$ \square $\frac{\square}{\square}$</p>	<p>10</p>  <p>$\frac{\square}{\square}$ \square $\frac{\square}{\square}$</p>

Student Name: _____

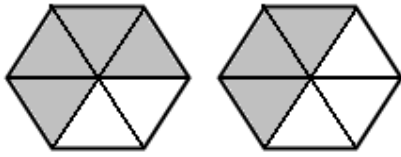
Score: _____

Answer key

Compare the Shapes

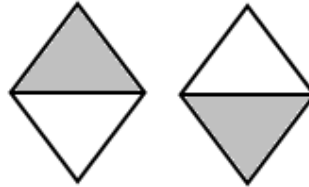
Sheet 1

1



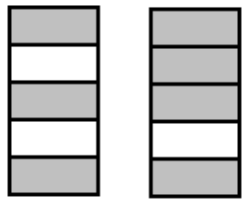
$$\frac{4}{6} > \frac{3}{6}$$

2



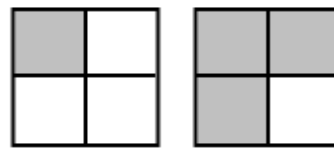
$$\frac{1}{2} = \frac{1}{2}$$

3



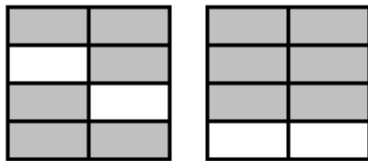
$$\frac{3}{5} < \frac{4}{5}$$

4



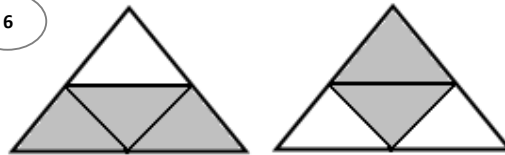
$$\frac{1}{4} < \frac{3}{4}$$

5



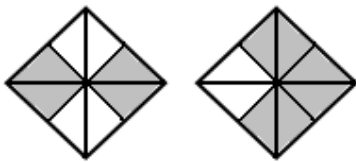
$$\frac{6}{8} = \frac{6}{8}$$

6



$$\frac{3}{4} > \frac{2}{4}$$

7



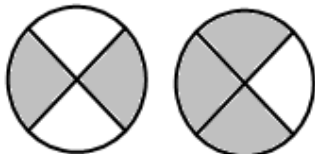
$$\frac{4}{8} < \frac{6}{8}$$

8



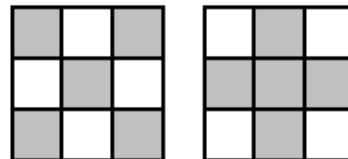
$$\frac{4}{5} > \frac{1}{5}$$

9



$$\frac{2}{4} < \frac{3}{4}$$

10



$$\frac{5}{9} = \frac{5}{9}$$