

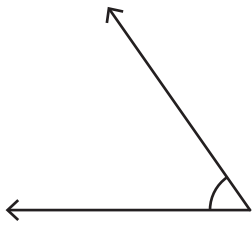
Name : _____

Types of Angles - Revision

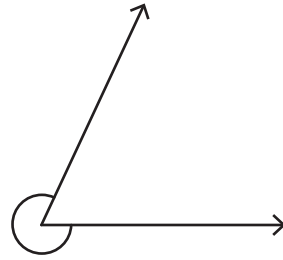
T1S1

A) Identify each angle as acute, right, obtuse, straight, or reflex.

1)



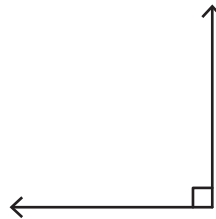
2)



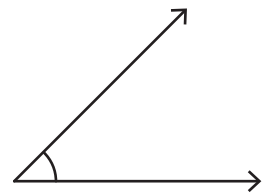
B) 1) Which of the following is a right angle?



b)



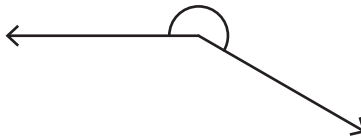
c)



2) Which of the following is an obtuse angle?



b)

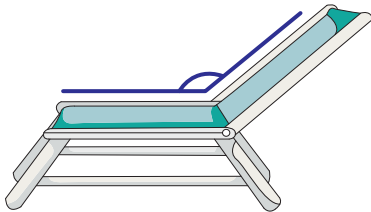


c)




C) Identify the type of each angle.

1)

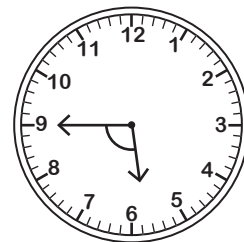


2)

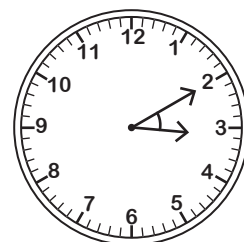


D) Identify the type of angle formed by the hands of each clock.

1)



2)



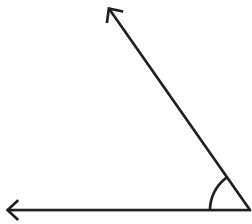
Name : _____

Types of Angles - Revision

T1S1

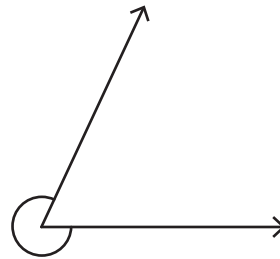
A) Identify each angle as acute, right, obtuse, straight, or reflex.

1)



Acute angle

2)

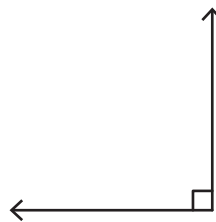


Reflex angle

B) 1) Which of the following is a right angle?

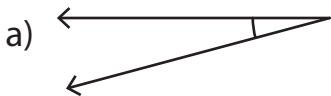


b) ✓



c)

2) Which of the following is an obtuse angle?

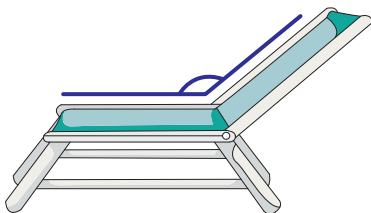


b)

c) ✓


C) Identify the type of each angle.

1)



Obtuse angle

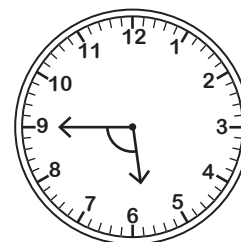
2)



Acute angle

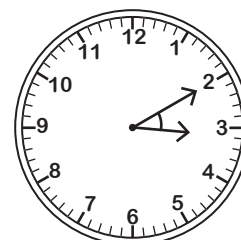
D) Identify the type of angle formed by the hands of each clock.

1)



Obtuse angle

2)



Acute angle