

Name : _____

Counting Angles

Sheet 1

Count the number of angles of each type in the following figures.

1)

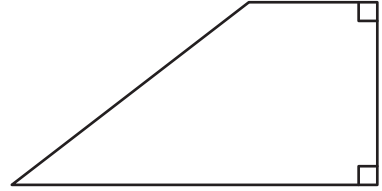


Number of acute angles: _____

Number of right angles: _____

Number of obtuse angles: _____

2)

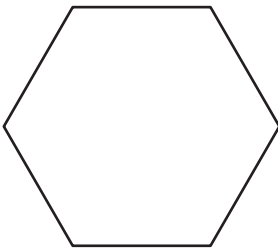


Number of acute angles: _____

Number of right angles: _____

Number of obtuse angles: _____

3)

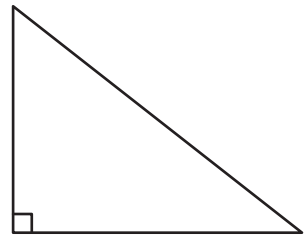


Number of acute angles: _____

Number of right angles: _____

Number of obtuse angles: _____

4)

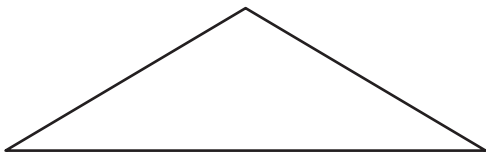


Number of acute angles: _____

Number of right angles: _____

Number of obtuse angles: _____

5)

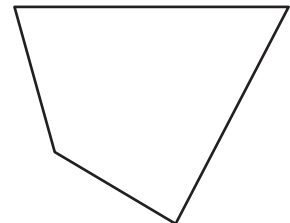


Number of acute angles: _____

Number of right angles: _____

Number of obtuse angles: _____

6)



Number of acute angles: _____

Number of right angles: _____


Number of obtuse angles: _____

Name : _____

Counting Angles

Count the number of angles of each type in the following figures.

1)

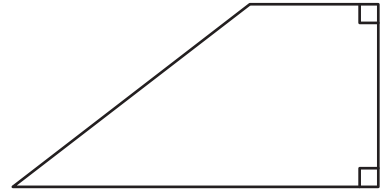


Number of acute angles: 2

Number of right angles: Nil

Number of obtuse angles: 2

2)

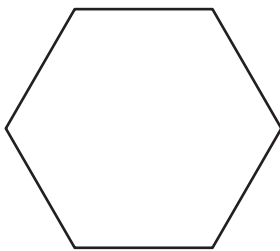


Number of acute angles: 1

Number of right angles: 2

Number of obtuse angles: 1

3)

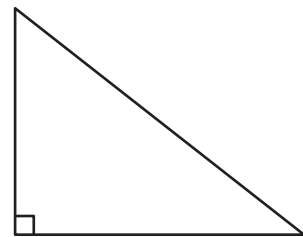


Number of acute angles: Nil

Number of right angles: Nil

Number of obtuse angles: 6

4)

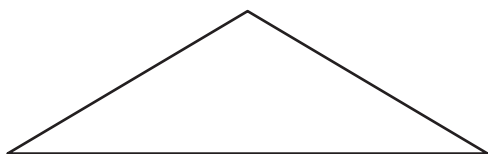


Number of acute angles: 2

Number of right angles: 1

Number of obtuse angles: Nil

5)

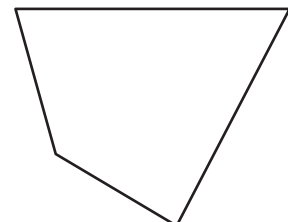


Number of acute angles: 2

Number of right angles: Nil

Number of obtuse angles: 1

6)



Number of acute angles: 3

Number of right angles: Nil

Number of obtuse angles: 1