

Name: _____

Drawing Hands - 5 Minutes

Sheet 1

Draw hands on each clock for the time given below:

1)



Time: **8:05**

2)



Time: **10:15**

3)



Time: **1:10**

4)




Time: **7:25**

5)



Time: **5:50**

6)



Time: **12:15**

7)



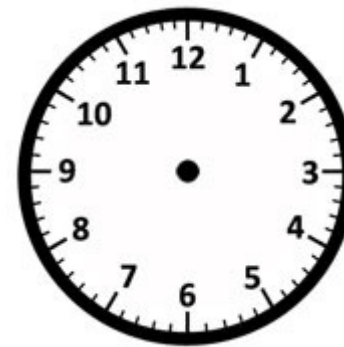
Time: **11:30**

8)



Time: **3:40**

9)



Time: **9:55**


Name: _____

Drawing Hands - Minutes

Sheet 1

Draw hands on each clock for the time given below:

1)




Time: **3:49**

2)




Time: **12:04**

3)



Time: **6:30**

4)



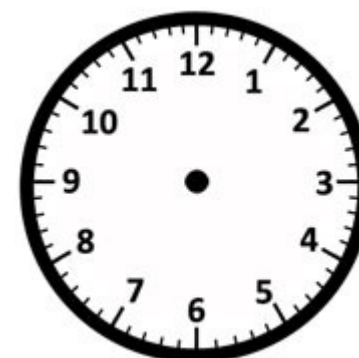
Time: **7:15**

5)



Time: **11:34**

6)



Time: **4:28**

7)



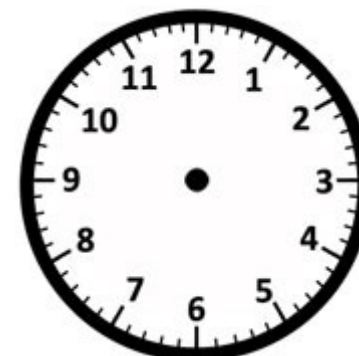
Time: **2:22**

8)



Time: **8:56**

9)



Time: **1:01**


Name : _____

Telling Time


5 minutes: S1

A) Read each clock, and write the time.


1)



2)




3)



4)



5)




6)




B) Choose the clock that shows the given time.

Time : 12:35

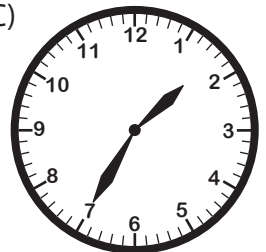
A)



B)



C)



C) Choose the correct time shown by the clock.



A)

4:50

B)

10:20

C)

3:50

Name : _____

Telling Time


1 Minute: S1

A) Read each clock, and write the time.

1)



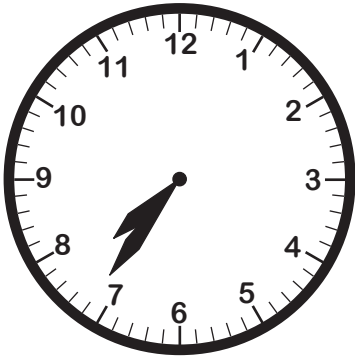
2)




3)



4)



5)




6)



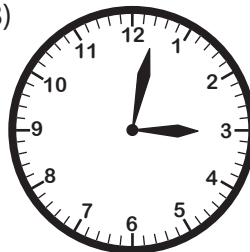
B) Choose the clock that shows the given time.

Time : 3:02


A)




B)



C)



C) Choose the correct time shown by the clock.



A)

5:59

B)

6:58

C)

11:30

Name: _____

Answer key

Drawing Hands - 5 Minutes

Sheet 1

Draw hands on each clock for the time given below:

1)



Time: **8:05**

2)



Time: **10:15**

3)



Time: **1:10**

4)



Time: **7:25**

5)



Time: **5:50**

6)



Time: **12:15**

7)



Time: **11:30**

8)



Time: **3:40**

9)



Time: **9:55**

Name: _____

Answer key

Drawing Hands - Minutes

Sheet 1

Draw hands on each clock for the time given below:

1)



Time: **3:49**

2)



Time: **12:04**

3)



Time: **6:30**

4)



Time: **7:15**

5)



Time: **11:34**

6)



Time: **4:28**

7)



Time: **2:22**

8)



Time: **8:56**

9)



Time: **1:01**


Name : _____

Telling Time

5 minutes: S1


A) Read each clock, and write the time.

1)




9:20

2)




5:05

3)



11:40

4)




2:25

5)



1:55

6)

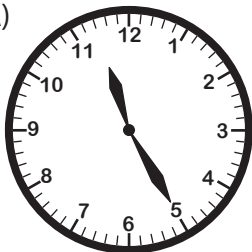


8:30


B) Choose the clock that shows the given time.

Time : 12:35


A)



B) ✓



C)



C) Choose the correct time shown by the clock.



A)

4:50

B)

10:20

C) ✓

3:50

Name : _____

Telling Time

1 Minute: S1


A) Read each clock, and write the time.

1)



2:57

2)




8:24

3)



9:45

4)




7:36

5)






10:10

6)




4:08

B) Choose the clock that shows the given time.

Time : 3:02	A)  B)  C) 
-------------	---

C) Choose the correct time shown by the clock.



A) **5:59**

B) **6:58**

C) **11:30**